



UNIVERSITY OF CAMBRIDGE INTERNATIONAL EXAMINATIONS
General Certificate of Education Advanced Subsidiary Level and Advanced Level

GEOGRAPHY

9696/11

Paper 1 Core Geography

May/June 2010

INSERT 1

3 hours

READ THESE INSTRUCTIONS FIRST

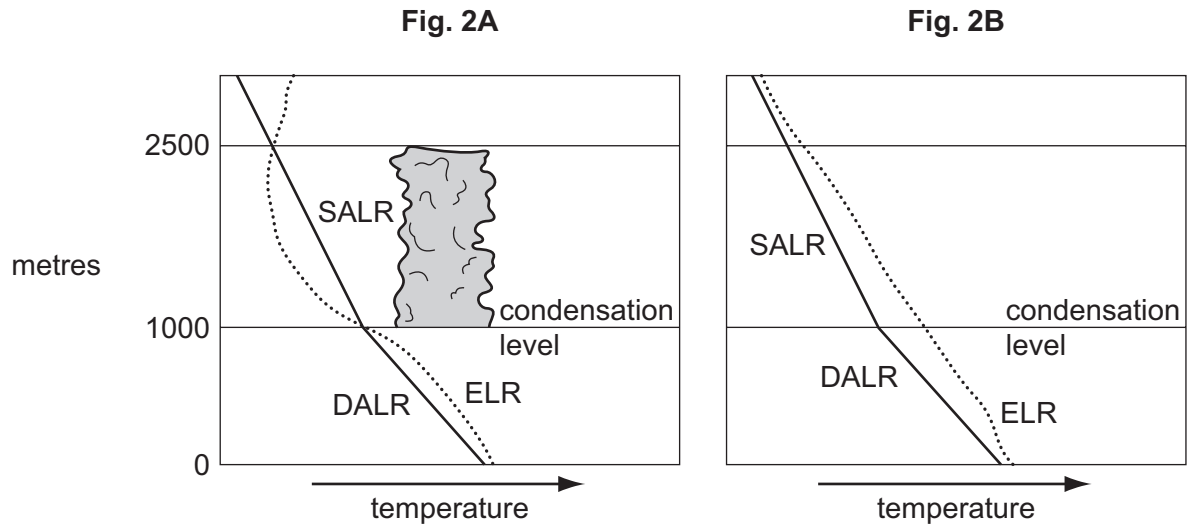
This Insert contains all the Figures and the Table referred to in the questions.

This document consists of **7** printed pages and **1** blank page.



Fig. 2 for Question 2

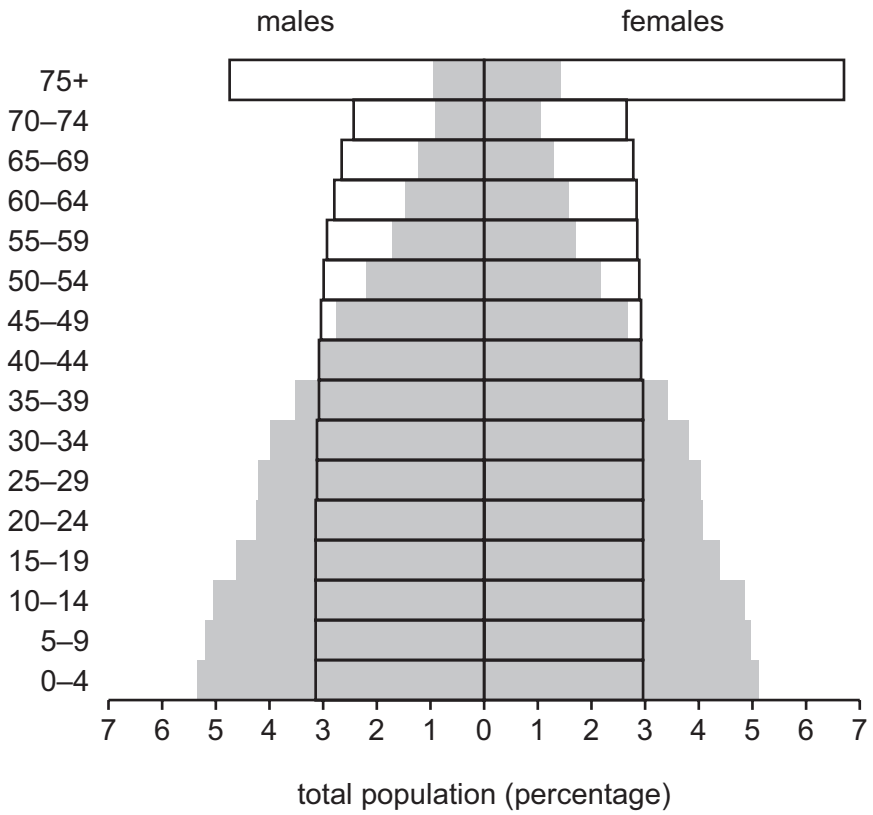
Temperature/height diagrams showing two different atmospheric conditions

**Key**

- ELR environmental lapse rate
- DALR dry adiabatic lapse rate
- SALR saturated adiabatic lapse rate

Fig. 3 for Question 4

Age/sex pyramids of the world's population in 2000 and 2100



Key
 ■ 2000 (actual)
 □ 2100 (predicted)

Fig. 4 for Question 5

Main movements of Afghan refugees, 1979–1990



Key

- ← refugee movement
- ▲ refugee camp or settlement
- capital city
- - - - international border
- - - - border of Soviet Republic

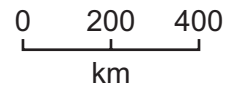


Table 1 for Question 6

The world's urban population

	1975		2000		2030*	
	millions urban	% urban	millions urban	% urban	millions urban	% urban
North America	180	74	239	77	314	84
South America and the Caribbean	197	61	391	75	604	83
Europe	455	67	545	75	571	83
Oceania	15	71	21	70	31	76
Africa	102	25	297	38	766	54
Asia	594	25	1352	37	2605	53

* UN prediction

BLANK PAGE

Permission to reproduce items where third-party owned material protected by copyright is included has been sought and cleared where possible. Every reasonable effort has been made by the publisher (UCLES) to trace copyright holders, but if any items requiring clearance have unwittingly been included, the publisher will be pleased to make amends at the earliest possible opportunity.

University of Cambridge International Examinations is part of the Cambridge Assessment Group. Cambridge Assessment is the brand name of University of Cambridge Local Examinations Syndicate (UCLES), which is itself a department of the University of Cambridge.